

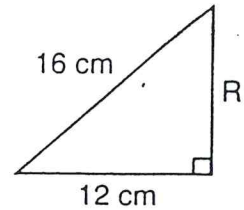
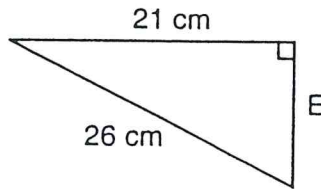
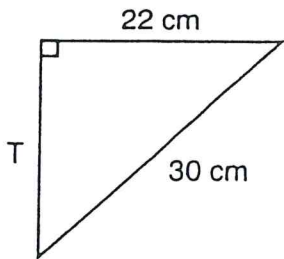
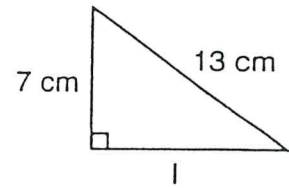
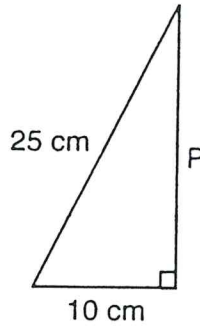
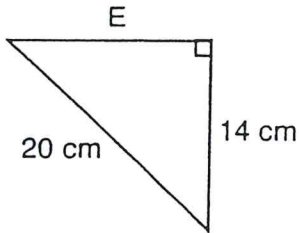
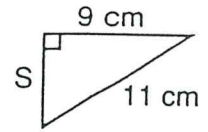
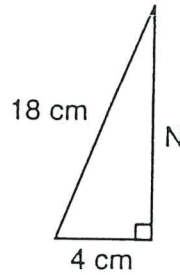
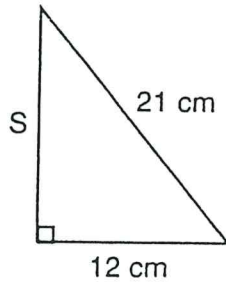
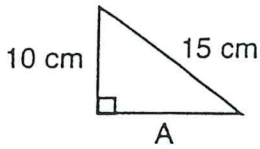
# Pythagorean Theorem

Skill: finding the lengths of legs of right triangles

Name \_\_\_\_\_

What was written on the vegetable farmer's tombstone?

To find the punchline, use a table of square roots or a calculator to find the length of each leg not given to the nearest thousandth. Then, put the corresponding letter above each answer at the bottom of the page.



- 10.583 cm    14.283 cm    17.234 cm    20.396 cm    10.954 cm    17.55 cm
- 22.913 cm    15.33 cm    11.18 cm    6.325 cm